

--	--	--	--	--	--	--	--	--	--

Fourth Semester B.E. Degree Examination, June 2012
Graph Theory and Combinatorics

Time: 3 hrs.

Max. Marks:100

Note: Answer FIVE full questions, selecting at least TWO questions from each part.

PART - A

- 1 a. Define and give an example for each of the following: -
 i) Connected graph ii) Spanning subgraph iii) Complement of a graph. (06 Marks)
 b. Define isomorphism. Show that the following graphs are isomorphic. (07 Marks)

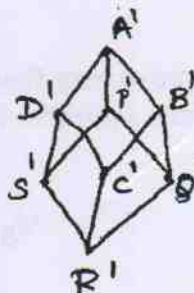
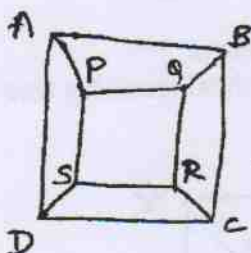


Fig.Q1 (b)

- c. In the graph given below find the number of paths from v_1 to v_8 . How many of these paths have length 5. (07 Marks)

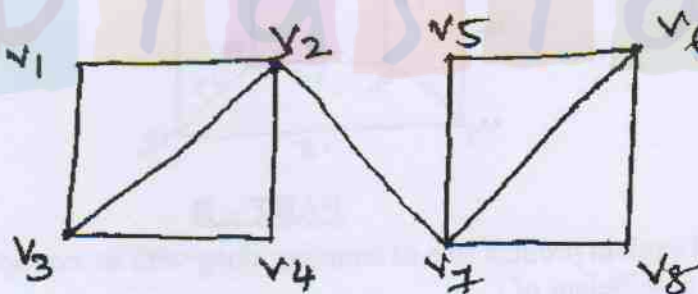


Fig.Q1(c)

- 2 a. Define Hamilton cycle. How many edge-disjoint Hamilton cycles exist in the complete graph with seven vertices? Also draw the graph to show these Hamilton cycles. (07 Marks)
 b. Prove that Peterson graph is non-planar. (06 Marks)
 c. Define chromatic number of a graph. Find the chromatic polynomial for the graph shown below and also find the chromatic number for the same. (07 Marks)

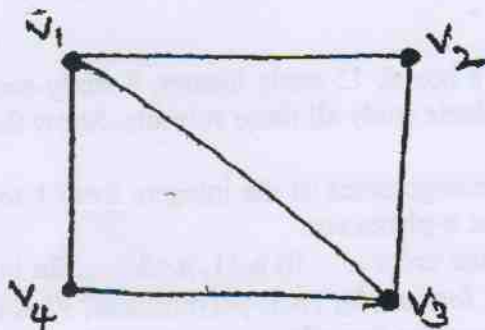


Fig.Q2(c)

Important Note : 1. On completing your answers, compulsorily draw diagonal cross lines on the remaining blank pages.
 2. Any revealing of identification, appeal to evaluator and /or equations written eg. 42+8 = 50, will be treated as malpractice.

- 3 a. Define and give an example for each of the following:
 i) Rooted tree ii) Complete binary tree iii) Balanced tree. (06 Marks)
 b. Construct an optimal prefix code for the symbols a, o, q, u, y, z that occur with the frequencies 20, 28, 4, 17, 12, 7 respectively. (07 Marks)
 c. Obtain the optimal prefix code for the message "ROAD IS GOOD". Indicate the code. (07 Marks)
- 4 a. For the network shown below, determine the maximum flow between the vertices A and D by identifying the cutset of minimum capacity. (07 Marks)

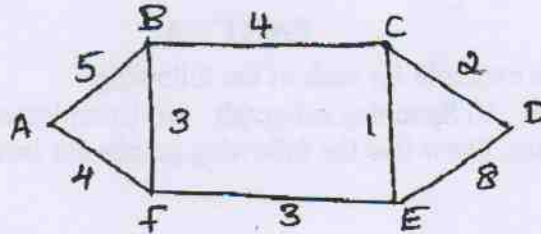


Fig.Q4(a)

- b. State and prove max-flow and min-cut theorem. (06 Marks)
 c. Apply prim's algorithm to determine a minimal spanning tree for the weighted graph shown below. (07 Marks)

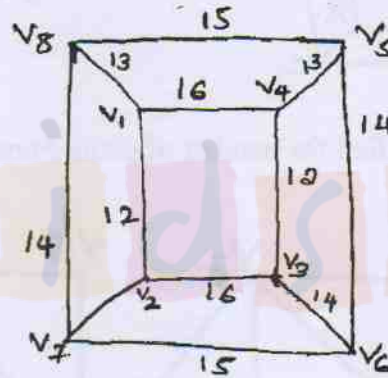


Fig.Q4 (c)

PART - B

- 5 a. State and explain product rule of counting along with an example. (04 Marks)
 b. Find the co-efficient of:
 i) $x^9 y^3$ in the expansion of $(2x-3y)^{12}$
 ii) x^0 in the expansion of $(3x^2 - \frac{2}{x})^{15}$. (08 Marks)
 c. i) From seven consonants and five vowels how many sets consisting of four different consonants and three different vowels can be formed.
 ii) Find the number of arrangement of the letters in TALLAHASSEE which have no adjacent A's. (08 Marks)
- 6 a. Out of 30 students in a hostel, 15 study history, 8 study economics, and 6 study geography. It is known that 3 students study all these subjects. Show that 7 or more students study none of these subjects. (06 Marks)
 b. Find the number of derangements of the integers from 1 to 2n satisfying the condition that the elements in the first n-places are:
 i) 1, 2, 3, ..., n in some order ii) n+1, n+2, ..., 2n in some order. (06 Marks)
 c. What is the expansion formula for rook-polynomials? Find the rook polynomial for the 3 x 3 board by using the expansion formula. (08 Marks)

- 7 a. i) Find a generating function for the following sequence, $0^2, 1^2, 2^2, 3^2, \dots$
 ii) Find the co-efficient of x^{27} in the expansions of the following functions.
 $(x^4 + 2x^5 + 3x^6 + \dots)^5$. (06 Marks)
- b. Using generating function, find the number of partitions of $n = 6$. (07 Marks)
- c. Define an exponential generating function. Find the exponential function for the number of ways to arrange n -letters $n \geq 0$, selected for each of the following words.
 i) HAWAII
 ii) MISSISSIPPI
 iii) ISOMORPHISM. (07 Marks)
- 8 a. Solve the recurrence relation (Fibonacci relation)
 $F_{n+2} = F_{n+1} + F_n$ given $F_0 = 0$ and $F_1 = 1$ and $n \geq 0$. (06 Marks)
- b. Solve the recurrence relation
 $a_{n+3} - 3a_{n+2} + 3a_{n+1} - a_n = 3 + 5n$ for $n \geq 0$. (07 Marks)
- c. Find a generating function for the recurrence relation
 $a_{n+2} - 3a_{n+1} + 2a_n = 0$, $n \geq 0$ and $a_0 = 1$, $a_1 = 6$. Hence solve it. (07 Marks)

stupidstupid.com